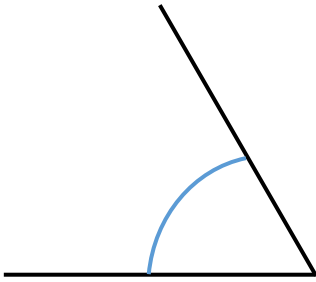
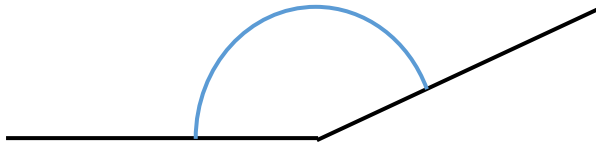


# Winkel 4

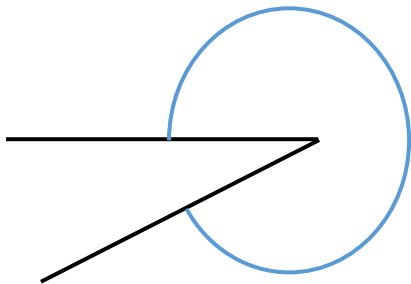
Zeichne folgende Winkel ein!



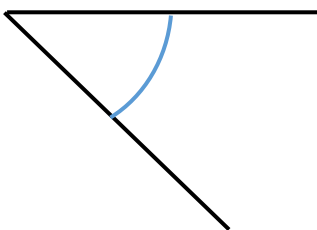
spitzer Winkel:  $60^\circ$



stumpfer Winkel:  $155^\circ$

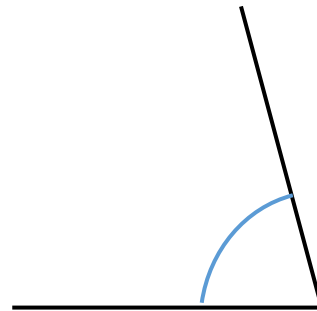


überstumpfer Winkel:  $333^\circ$

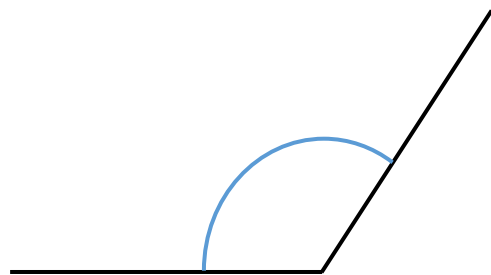


spitzer Winkel:  $44^\circ$

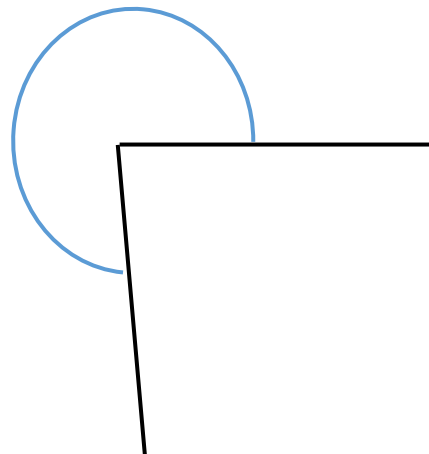
# (Lösung)



spitzer Winkel:  $75^\circ$



stumpfer Winkel:  $110^\circ$



überstumpfer Winkel:  $275^\circ$



rechter Winkel:  $90^\circ$