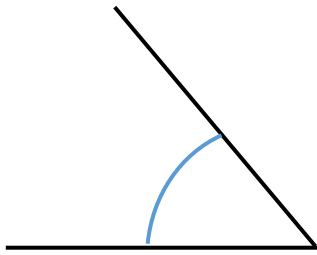
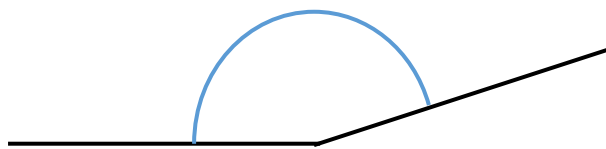


# Winkel 3

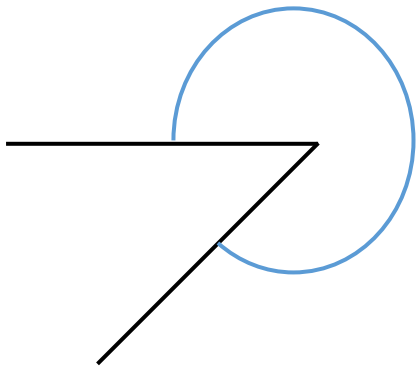
Zeichne folgende Winkel ein!



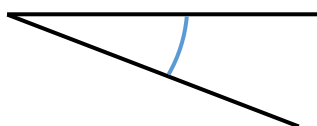
spitzer Winkel:  $50^\circ$



stumpfer Winkel:  $162^\circ$

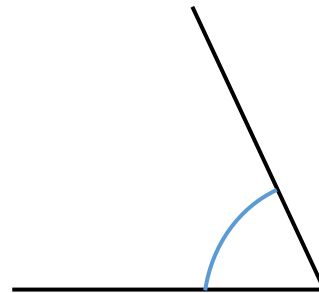


überstumpfer Winkel:  $315^\circ$

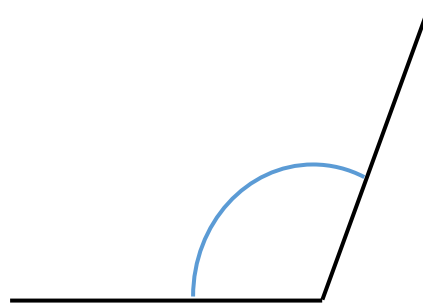


spitzer Winkel:  $21^\circ$

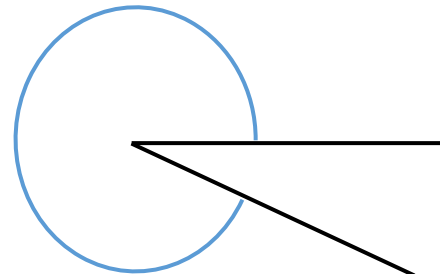
# (Lösung)



spitzer Winkel:  $65^\circ$



stumpfer Winkel:  $110^\circ$



überstumpfer Winkel:  $335^\circ$



rechter Winkel:  $90^\circ$