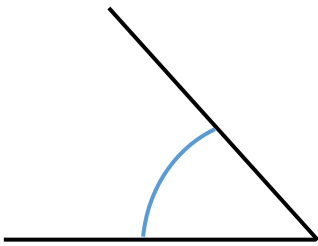


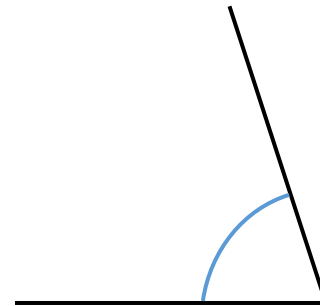
# Winkel 1

# (Lösung)

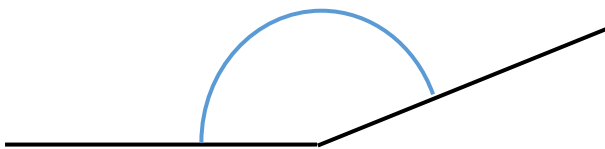
Miss die Winkel und gib ihre Art an!



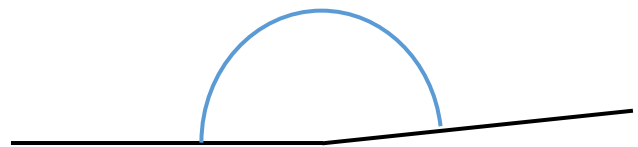
spitzer Winkel:  $48^\circ$



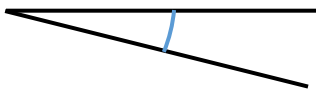
spitzer Winkel:  $72^\circ$



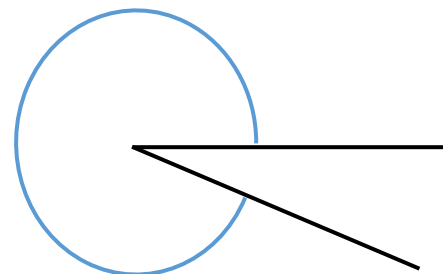
stumpfer Winkel:  $158^\circ$



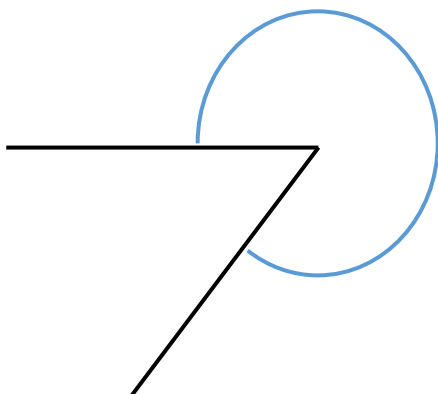
stumpfer Winkel:  $174^\circ$



spitzer Winkel:  $15^\circ$



überstumpfer Winkel:  $337^\circ$



überstumpfer Winkel:  $307^\circ$



rechter Winkel:  $90^\circ$